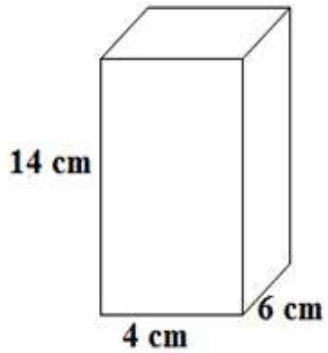


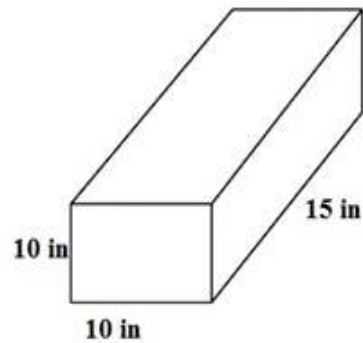
Surface Area of Rectangular Prisms

worksheet 6

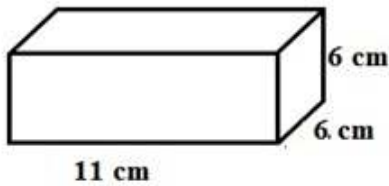
Find the surface area of each rectangular prism.



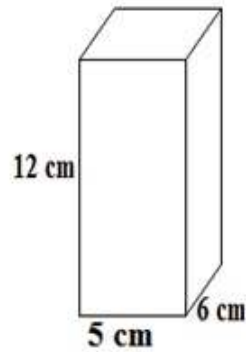
surface area = _____



surface area = _____



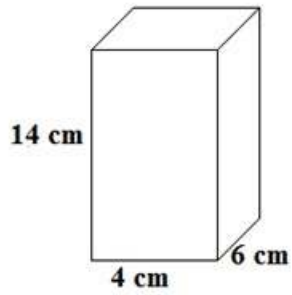
surface area =



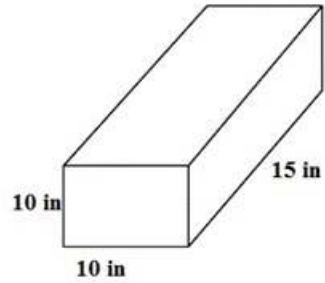
surface area = _____

Surface Area of Rectangular Prisms

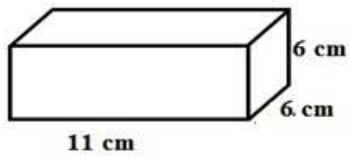
worksheet 6 answers



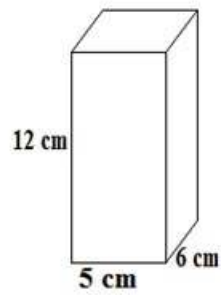
surface area = 48 sq. cm



surface area = 70 sq. cm



surface area = 46 sq. cm



surface area = 46 sq. cm