



# Volume of Rectangular Prisms

worksheet 3

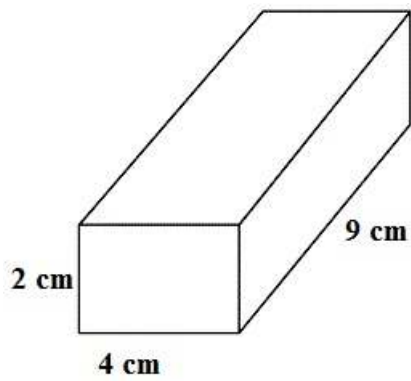
Find the volume of each rectangular prism.



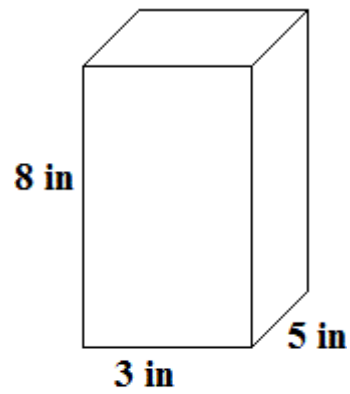
V \_\_\_\_\_



V \_\_\_\_\_




V \_\_\_\_\_




V \_\_\_\_\_

# Volume of Rectangular Prisms

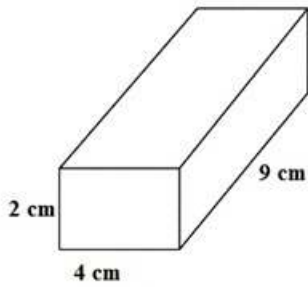
worksheet 3 answers



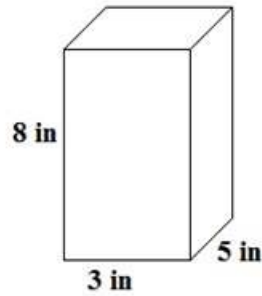
v 22 cm<sup>3</sup>



v 384 cm<sup>3</sup>



v 72 cm<sup>3</sup>



v 120 cm<sup>3</sup>