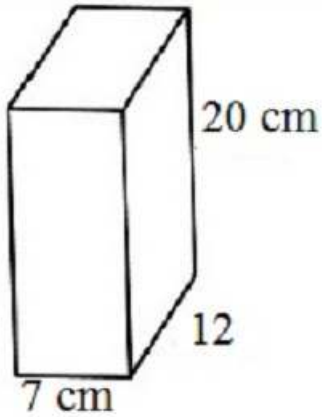


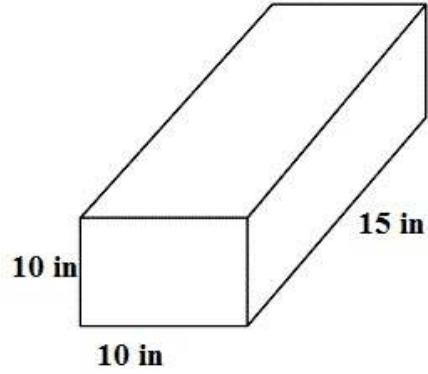
# Volume of Rectangular Prisms

worksheet 6

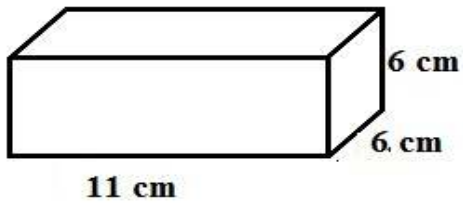
Find the volume of each rectangular prism.



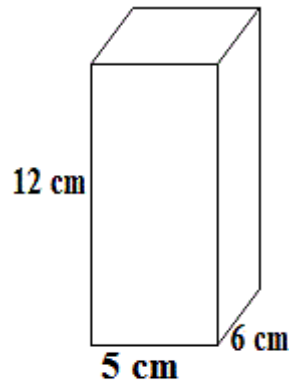
v = \_\_\_\_\_



V \_\_\_\_\_



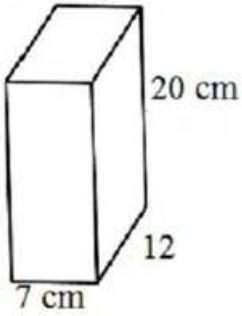
v \_\_\_\_\_



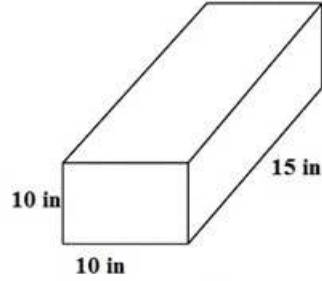
V \_\_\_\_\_

# Volume of Rectangular Prisms

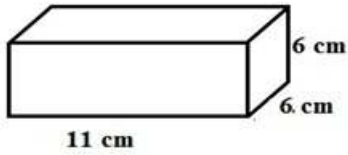
worksheet 6 answers



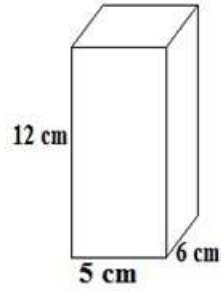
$$v = \underline{1680 \text{ cm}^3}$$



$$v \underline{1500 \text{ cm}^3}$$



$$v \underline{396 \text{ cm}^3}$$



$$v \underline{360 \text{ cm}^3}$$