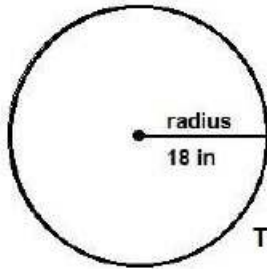
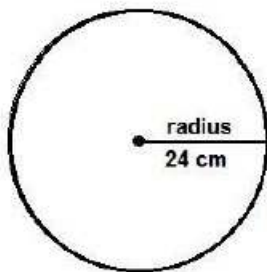


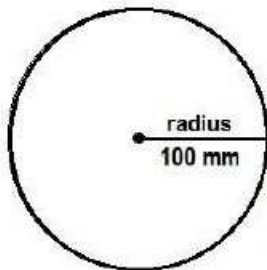
Find the area of the circles -1



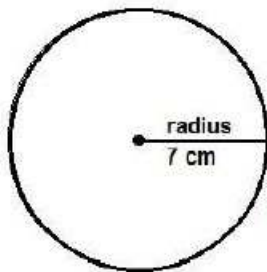
The area of this circle is _____



The area of this circle is _____

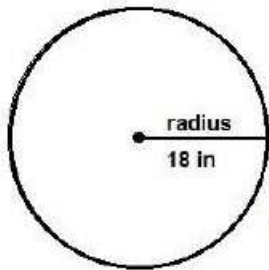


The area of this circle is _____

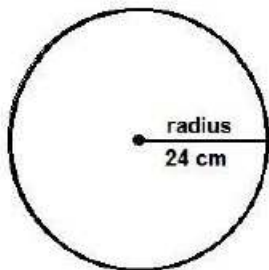


The area of this circle is _____

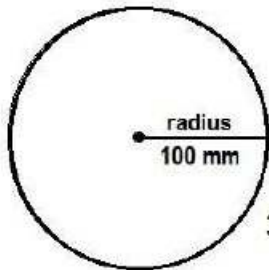
Find the area of the circles – 1 worksheet answers



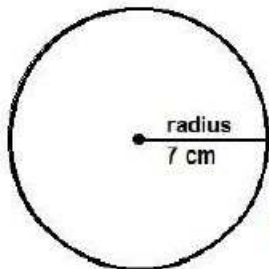
$1,017.36 \text{ in}^2$



$1,808.64 \text{ cm}^2$



$31,400 \text{ mm}^2$



153.86 cm^2