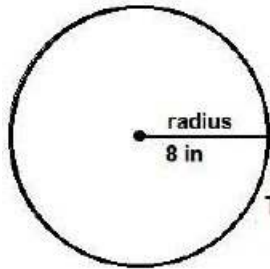
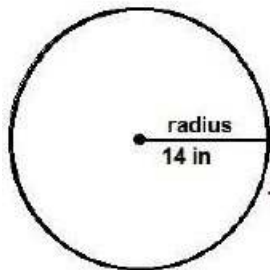


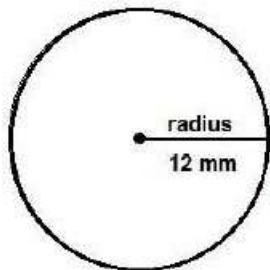
## Find the area of the circles -3



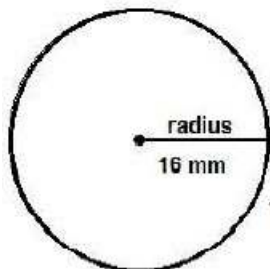
The area of this circle is \_\_\_\_\_



The area of this circle is \_\_\_\_\_



The area of this circle is \_\_\_\_\_



The area of this circle is \_\_\_\_\_

Find the area of the circles - 3 answers

