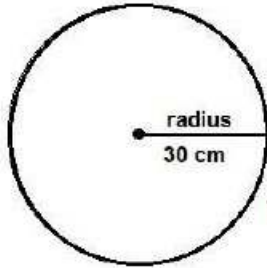
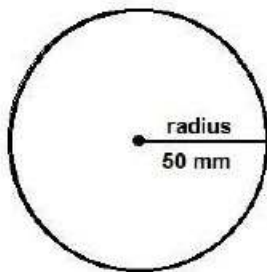


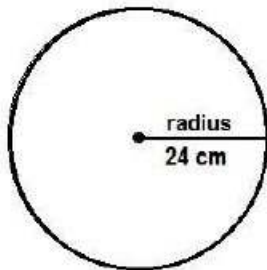
## Find the area of the circles - 4



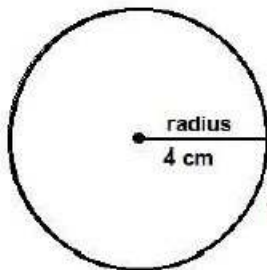
The area of this circle is \_\_\_\_\_



The area of this circle is \_\_\_\_\_



The area of this circle is \_\_\_\_\_



The area of this circle is \_\_\_\_\_

Find the area of the circles – 4 answers

