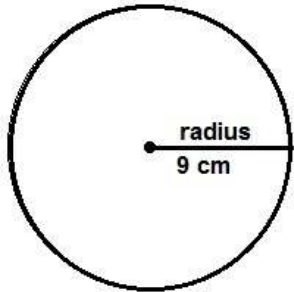
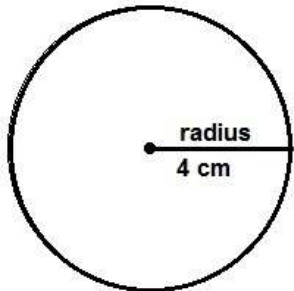


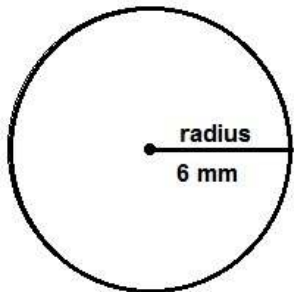
Find the circumference - 2



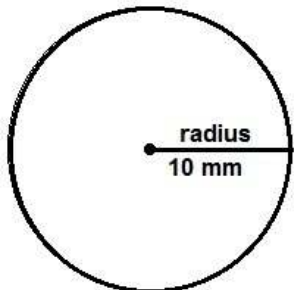
The circumference of this circle is _____



The circumference of this circle is _____

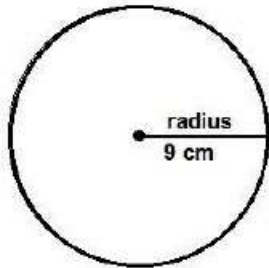


The circumference of this circle is _____

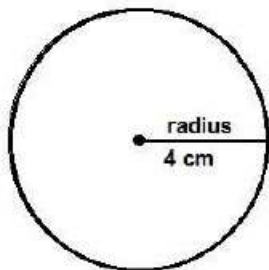


The circumference of this circle is _____

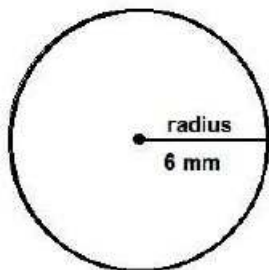
Find the circumference - 2 worksheet answers



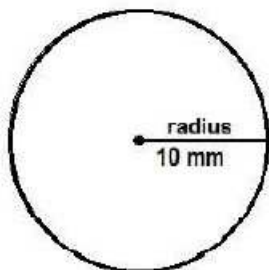
The circumference of this circle is 56.52 cm



The circumference of this circle is 25.12 cm



The circumference of this circle is 37.68 mm



The circumference of this circle is 62.8 mm