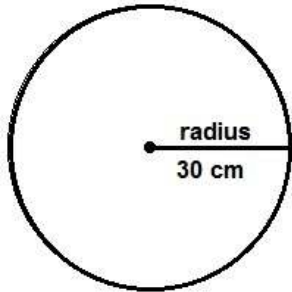
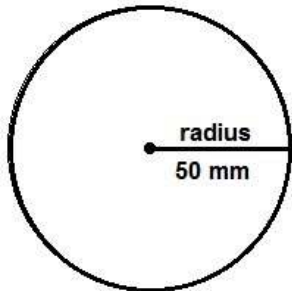


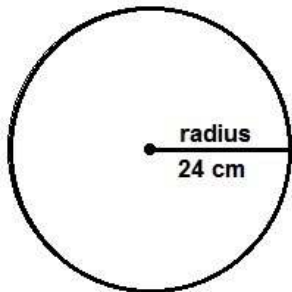
Find the circumference - 4



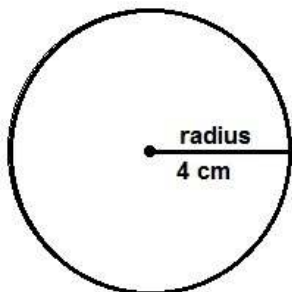
The circumference of this circle is _____



The circumference of this circle is _____

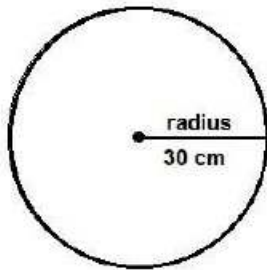


The circumference of this circle is _____

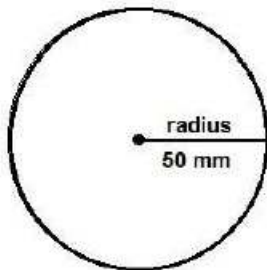


The circumference of this circle is _____

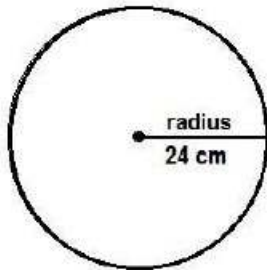
Find the circumference – 4 answers



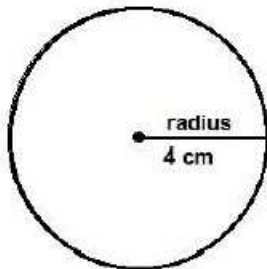
The circumference of this circle is 188.4 cm



The circumference of this circle is 314 mm



The circumference of this circle is 150.72



The circumference of this circle is 25.12 cm