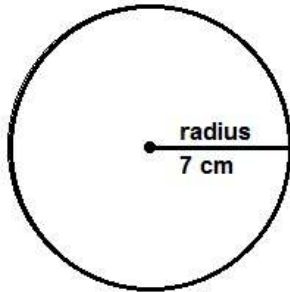
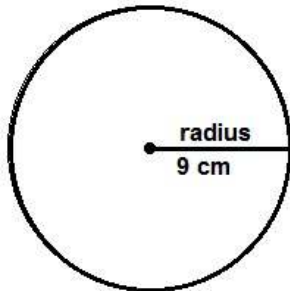


Find the diameter and circumference -1



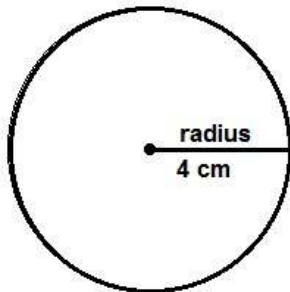
The diameter of this circle is _____

The circumference of this circle is _____



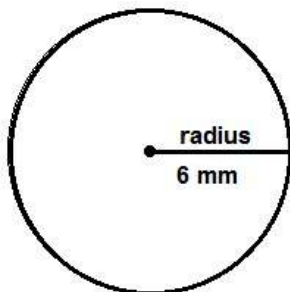
The diameter of this circle is _____

The circumference of this circle is _____



The diameter of this circle is _____

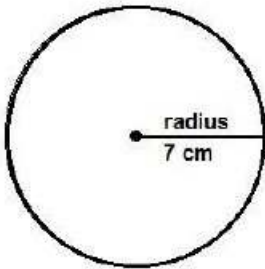
The circumference of this circle is _____



The diameter of this circle is _____

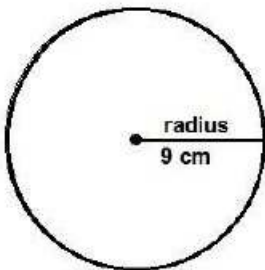
The circumference of this circle is _____

diameter and circumference – 1 worksheet answers



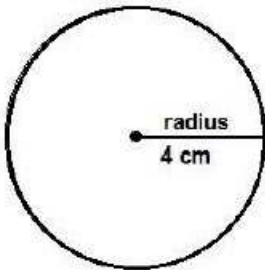
The diameter of this circle is 14 cm

The circumference of this circle is 43.96 cm



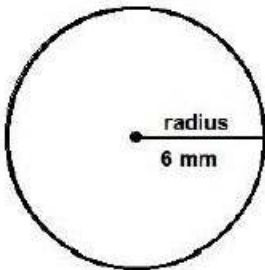
The diameter of this circle is 18cm

The circumference of this circle is 56.52 cm



The diameter of this circle is 8 cm

The circumference of this circle is 28.26 cm



The diameter of this circle is 12 mm

The circumference of this circle is 37.68 mm