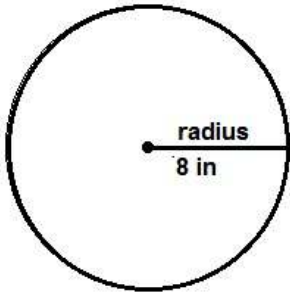
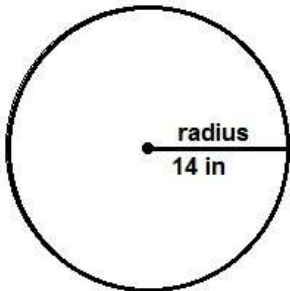


Find the diameter and circumference - 2



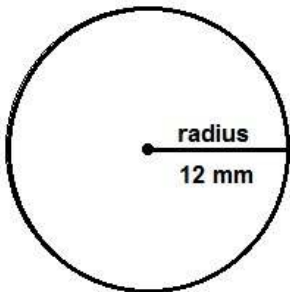
The diameter of this circle is _____

The circumference of this circle is _____



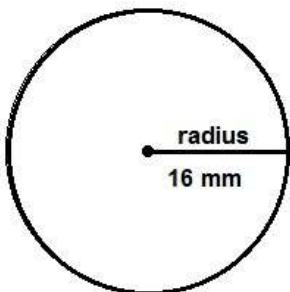
The diameter of this circle is _____

The circumference of this circle is _____



The diameter of this circle is _____

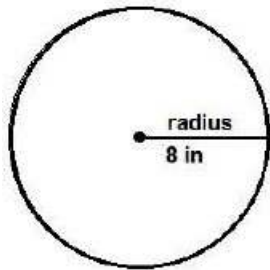
The circumference of this circle is _____



The diameter of this circle is _____

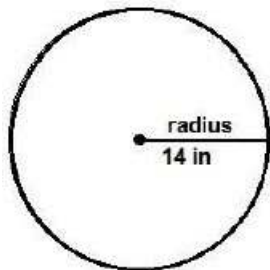
The circumference of this circle is _____

Find the diameter and circumference – 2 worksheet answers



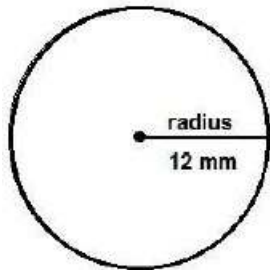
The diameter of this circle is 16 in

The circumference of this circle is 50.24 in



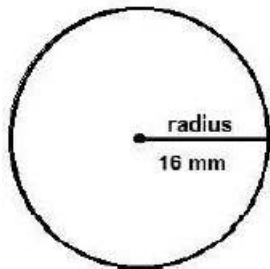
The diameter of this circle is 28 in

The circumference of this circle is 87.92 in



The diameter of this circle is 24 mm

The circumference of this circle is 75.36 mm



The diameter of this circle is 32 mm

The circumference of this circle is 100.48 mm