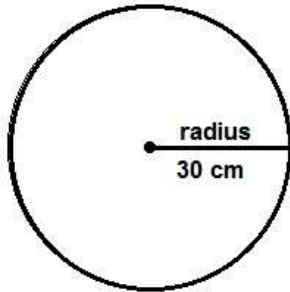
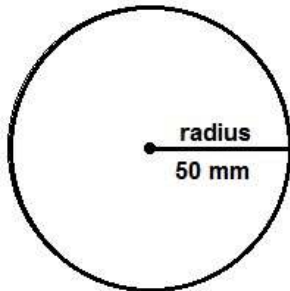


# Find the diameter and circumference - 3



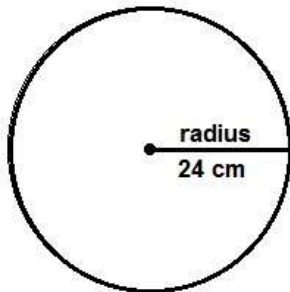
The diameter of this circle is \_\_\_\_\_

The circumference of this circle is \_\_\_\_\_



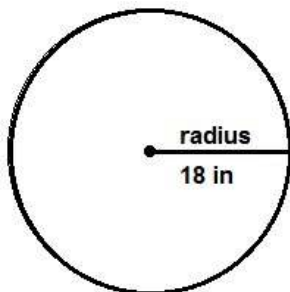
The diameter of this circle is \_\_\_\_\_

The circumference of this circle is \_\_\_\_\_



The diameter of this circle is \_\_\_\_\_

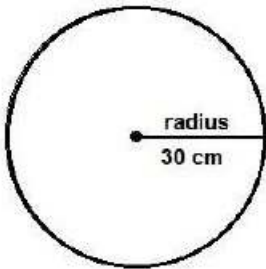
The circumference of this circle is \_\_\_\_\_



The diameter of this circle is \_\_\_\_\_

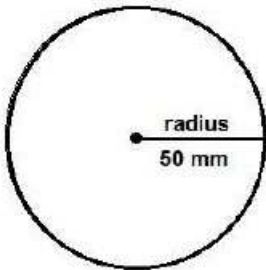
The circumference of this circle is \_\_\_\_\_

## Find the diameter and circumference worksheet 3 answers



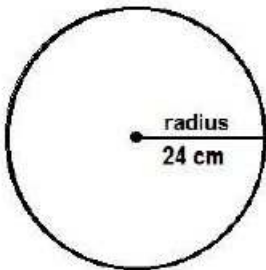
The diameter of this circle is 60 cm

The circumference of this circle is 188.4 cm



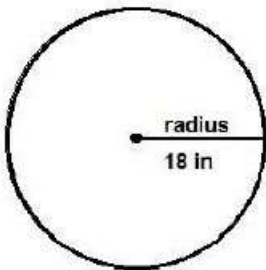
The diameter of this circle is 100 mm

The circumference of this circle is 314 mm



The diameter of this circle is 24 cm

The circumference of this circle is 75.36 cm



The diameter of this circle is 36 in

The circumference of this circle is 113.04 in